

#ESTUDOEMCASA


BLOCO N.º 2		DISCIPLINA Matemática
ANO(S)	1º	
APRENDIZAGENS ESSENCIAIS	<ul style="list-style-type: none"> <li>• Números e operações;</li> <li>• Reconhecer números;</li> <li>• Efetuar contagens.</li> </ul>	


Título/Tema do Bloco


Contar até 5, contar até 10, resolver problemas


Tarefas/ Atividades/ Desafios

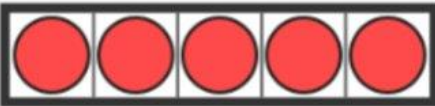
1. Vamos contar até 5. Quantos círculos estão em cada moldura?

1.1. 

1.2. 

1.3. 

1.4. 

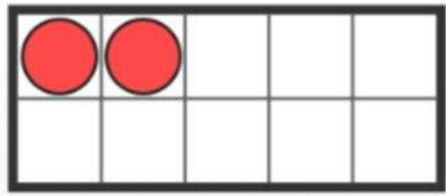
1.5. 

2. Vamos contar até 10. Quantos círculos estão em cada moldura?

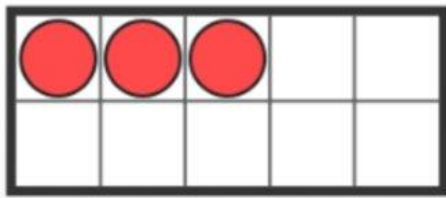
2.1.



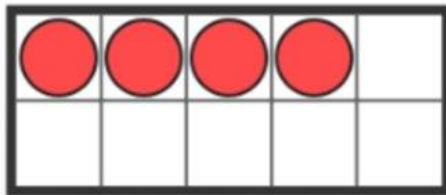
2.2.



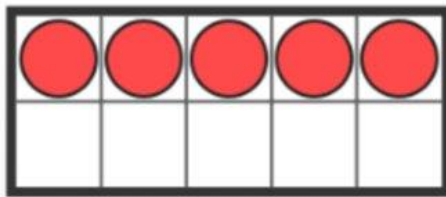
2.3.



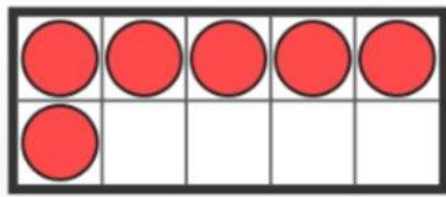
2.4.



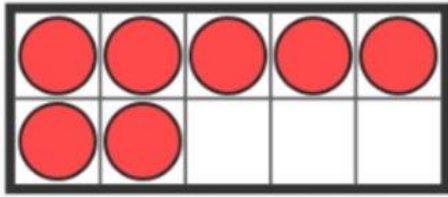
2.5.



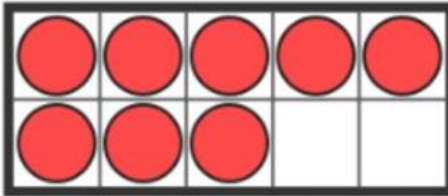
2.6.



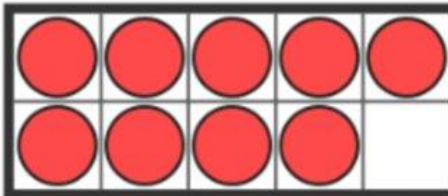
2.7.



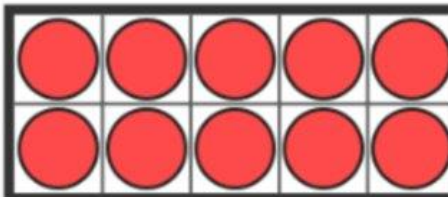
2.8.



2.9.

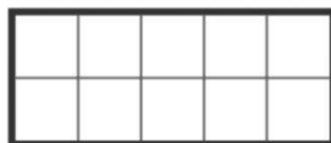


2.10.



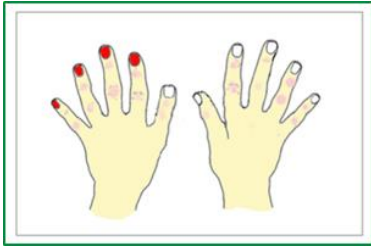
3. Volta a olhar para as imagens do exercício anterior. Quantos círculos **faltam** em cada moldura?

4. Problema: O João tem 10 berlindes nos dois bolsos das calças. Quantos berlindes pode ter em cada bolso?  
Se te ajudar, utiliza a grelha abaixo:

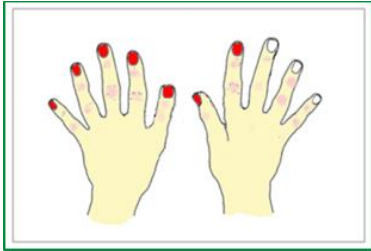


5. Quantas unhas estão pintadas em cada imagem? E quantas unhas estão por pintar?

5.1.



5.2.



5.3.

